



THE MALOMO ZONE EXAMINATIONS BOARD

2021 PRIMARY SCHOOL LEAVING CERTIFICATE MOCK EXAMINATIONS

SOCIAL AND BIBLE KNOWLEDGE

(100 MARKS)

Subject Number: P199

Time Allowed: 1hr 30min
1:00 - 2:30 pm

Wednesday 21st July

Name of candidate: _____
(Surname first)

Name of school: _____

Instructions:

- This paper contains 6 printed pages. Please check**
- This paper consists of three sections **A, B** and **C**
- Answer all questions. In **section A**, encircle the letter representing the right answer to each question. In **section B and C** write your answers in the spaces provided.
- Write your **name** and **name** of your school in the spaces provided on top of each and every page.
- In the table provided on this page, **tick** against the question number you have answered.
- Hand in your worked paper to the invigilator when time is called to stop writing

IMPORTANT

- Make sure you have written **your name, school name** and examination number.

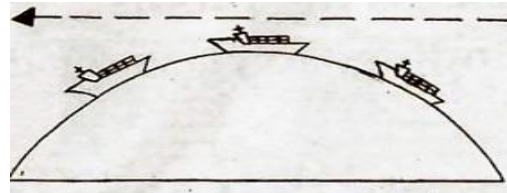
Question Number	Tick if Answered	Do not write in these columns	
1—40			
31			
32			
33			
34			
35			
36			
37			
38			
39			
40			
41			
42			
43			

SECTION A (30 MARKS)

Encircle the letter A, B, C or D that represents the right answer

- What was the symbol of Mwenemutapa Kingdom?
 - Mambo
 - Mwari
 - Fire
 - Rains
- Which of the following climate receives rainfall throughout the year?
 - Tropical Savannah climate
 - Tropical Monsoon climate
 - Mediterranean climate
 - Equatorial climate
- Why is John Chilembwe still remembered in the history of Malawi?
 - He was the first president of Malawi
 - He rose against the colonial government
 - He brought multiparty system of government
 - He was born in Chiradzulo
- Which of the following minerals is used for making military bombs?
 - Uranium
 - Coal
 - Aluminium
 - Petroleum
- Which of the following types of pollution can be caused by fumes from motor vehicles?
 - Water pollution
 - Soil pollution
 - Air pollution
 - Noise pollution
- What name was given to preserved dead bodies in Egyptian Civilization?
 - Hierographic
 - Shaduf
 - Mummies
 - Pyramid
- Why budgeting is important?
 - It shows how much money should be spent
 - It shows when to buy certain items
 - It makes financial resources available
 - It enables the person to purchase more items
- Which of the following are extensive flat areas?
 - Plains
 - Plateaus
 - Mountains
 - Rift valleys
- Which of the following was early explorer of Africa?
 - John Wesley
 - Mungo Park
 - William Wilbert force
 - Granville Sharpe

Figure 1.1 shows a proof of the shape of the earth. Use it to answer questions 10 and 11.

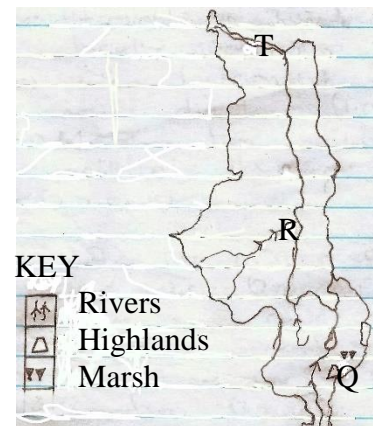


- What name is given to the proof in figure 1.1?
 - Moving straight line around the world
 - Sky seems touch the ground
 - Ship visibility on water surface
 - Photographs of the earth taken from the sky
- What does the diagram demonstrate on the shape of the earth?
 - The earth moves clockwise
 - The earth moves anti-clockwise
 - The movement of the ship
 - The earth is spherical
- Which of the following is the disadvantage of water transport?
 - It carries light goods
 - It is slow
 - It has a high risk of accidents
 - It is very expensive
- Which of the following are the factors that influence population change?
 - Migration and Education
 - Disaster and poverty
 - Migration and disaster
 - Birth and family
- Temperature is measured in ____
 - Kilograms
 - Centimetres
 - Degrees
 - Degree Celsius
- Why companies and industries are important?
 - Assist the government with revenue
 - They provide which craft to the community
 - They beg money to the country

- D. They misuse people's resources
16. What name is given to an area represented by councillor?
 A. Constituency
 B. Ward
 C. District
 D. Parliament
17. Which of the following types of insurance could benefit an injured person?
 A. Life insurance
 B. Endowment trust
 C. Medical insurance
 D. Property insurance
18. Which of the documents does not use the coat of arms?
 A. Driving licence
 B. Passport
 C. The constitution
 D. Bus ticket
19. What are the three main branches of the central government?
 i. The president iii. The legislature
 ii. The judiciary iv. The executive
 A. i, ii, and iii
 B. i, ii and iv
 C. i, iii, and iv
 D. ii, iii and iv
20. A set of law by which a country or organisation is administrated is called ____
 A. Corruption
 B. Courage
 C. Documentary
 D. Constitution
21. The branch of government which has the decentralised function of the central government to local communities is referred to
 A. Town assembly
 B. Local government
 C. City assembly
 D. Municipal assembly
22. Which of the following are the main types of work?
 1. Paid 3. Self-employment
 2. Voluntary 4. Employment
 A. 1 and 3
 B. 2 and 4
 C. 1 and 2
 D. 2 and 3

23. Which of the following is a rift valley type of lake in Malawi?
 A. Lake Malawi
 B. Lake Malombe
 C. Lake Chiuta
 D. Lake Chirwa
24. How many districts do we have in Malawi?
 A. 3
 B. 28
 C. 27
 D. 26

Figure 1.2 shows a map of malawi. Use it to answer questions 25 – 27



25. Which of the following crops grow well in area marked R?
 A. Tea
 B. Maize
 C. Rice
 D. Tobacco
26. What is the name of physical feature marked T?
 A. South Rukulu
 B. North Rukulu
 C. Rufira
 D. Songwe
27. What international importance is feature Q?
 A. It acts as boundary
 B. It is a source of Shire River
 C. It is a habitat for wild life
 D. It is good for settlement
28. Which of the following climate does Malawi experience?
 A. Equatorial
 B. Mediterranean
 C. Tropical-savannah
 D. Tropical desert
29. The line on the map drawn north or south of the equator are

- A. Prime meridians
 - B. Longitudes
 - C. Latitudes
 - D. Equator
30. Many boys and girls abuse drug and substances because of ____?

- A. HIV and AIDS
- B. Early marriages
- C. Peer pressure
- D. Absenteeism

SECTION B (35 marks)

- 31.
- a) Define migration _____ (1 mark)
 - b) List two major factors of population change

_____ (2 marks)
 - c) State two importance of physical features.

_____ (2 marks)
- 32.
- a) State two elements of weather

_____ (2 marks)
 - b) How weather is predicted locally? State two ways.

_____ (2 marks)
 - c) Which instrument is used to measure wind direction?
_____ (1 mark)
- 33.
- a) Mention two cultural practices which facilitate the spread of HIV AIDS

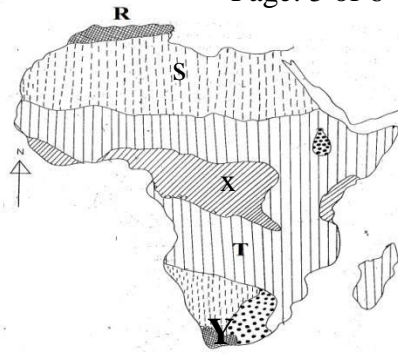
_____ (2 marks)
 - b) Write two misconceptions about HIV AIDS

_____ (2 marks)
 - c) Give one risky behaviour connected with the spread of HIV AIDS
_____ (1 mark)
- 34.
- a) List three contribution of Maravi Kingdom

_____ (3 marks)
 - b) Who was the king of Nkhamanga Kingdom?
_____ (1 mark)
 - c) State two Malawians who showed acts of bravery and courage

_____ (2 marks)

Figure 1.3 shows a map of Africa showing climate. Use it to answer questions that follow



- 35.
- a) What type of climate is marked R? _____ (1 mark)
 - b) State the animal used as transport in the climate marked S _____ (1 mark)
 - c) In which country is the climate marked Y found? _____ (1 mark)
 - d) State two factors that affect demand and supply _____ (2 marks)

- 36.
- a) Mention three financial institutions in Malawi _____ (3 marks)
 - b) State two forms of money _____ (2 marks)

- 37.
- a) Why are the following important in the Egyptian Civilization?
 - i. Shaduf _____ (1 mark)
 - ii. Hieroglyphics _____ (1 mark)
 - iii. Mummies _____ (1 mark)
 - b) Who is the head of judiciary _____ (1 mark)

SECTION C
BIBLE KNOWLEDGE ((35 MARKS))

- 38.
- c) Who helped Jesus in carrying the cross to Golgotha? _____ (1 mark)
 - d) Name two kings who tried Jesus` case? _____ (2 marks)
 - e) Give two things soldiers did to Jesus while he was on the cross _____ (2 marks)
 - f) List two things that guided the Israelites on their journey from Egypt to Canaan _____ (2 marks)

- 39.

- a) How many men did Gideon use to defeat the Midianites?
_____ (1 mark)
- b) Why Jacob`s family moved to Egypt from Canaan?
_____ (1 mark)
- c) To whom did Jacob fall in love between the daughters of Laban?
_____ (1 mark)
- d) Mention two roles of judges

_____ (2 marks)

- 40.
- a) Give two reasons why Jesus performed miracles?

_____ (2 marks)
- b) Name the female judge of the Israelites
_____ (1 mark)
- c) What two excuses that Moses gave towards the call of God?

_____ (2 marks)
- d) Mention one vulnerable group in a society?
_____ (1 mark)

- 41.
- a) Mention two ways of conserving the environment

_____ (2 marks)
- b) Define the following terms
i. Drug _____ (1 mark)
ii. Substance _____ (1 mark)
- c) Give any two causes of drug and substance abuse

_____ (2 marks)
- d) To whom was Joseph sold by his brothers?
_____ (1 mark)

- 42.
- a) Who was the first king of Israel?
_____ (1 mark)
- b) Explain how did Sirah and Paul communicate with God. Give two ways

_____ (2 marks)
- c) List down two importance of resolving conflicts peacefully

_____ (2 marks)
- d) Define the term Triumphant entry
_____ (1 mark)

- 43.
- a) Where did Joseph rise to the position of prime minister?
_____ (1 mark)
- b) Why did Jacob flee to Mesopotamia?
_____ (1 mark)
- c) Mention one thing that followers of Jesus were told to do
_____ (1 mark)

THE END OF QUESTION PAPER