



DZENJE PRIMARY SCHOOL

2022 STANDARD 8 END OF TERM 1 STANDARDIZED TEST

ARTS AND LIFE SKILLS (100 MARKS)

DATE:

Subject Number: P198

Time allowed: 1½ hours

11:30 – 1:00 pm

Name of Candidate: _____

(Surname First)

Name of School: _____

1. This paper contains 7 pages. Please check.
2. Write your name in the space provided and your examination number on top of each page of question paper.
3. This paper consists of two sections **A**, and **B** you are expected to answer all questions.

IMPORTANT

4. In the table provided on this page, tick against the question number you have answered.
5. Hand in your worked paper to the invigilator when time is called to stop.

@all rights reserved

Question number	Tick if answered	Do not write in these columns	
1 – 30			
31			
32			
33			
34			
35			
36			
37			
38			
39			
40			
41			
42			
43			
44			
45			
46			

Turn over

SECTION A (30 marks)

Encircle the letter representing the correct answer

EXPRESSIVE ARTS (10 marks)

- Which of the following materials are used for carving?


1 Adze	2 Scissors
3 Soap stone	4 Wood
A 1 and 2	B 1 and 3
C 2 and 4	D 3 and 4
- In the component of general space, which sporting activity does not need air pattern?

A chess	B netball
C jumping	D table tennis
- Which of the following is a common feeling expressed in music?

A sorrow	B praise
C anger	D joy
- Which of the following musical instruments are played by blowing?

A whistle and kalingo
B xylophone and whistle
C flute and whistle
D chisekese and microphone

Figure 1 is a diagram of musical instrument. Use it to answer question 5 and 6.



- Identify the musical instrument.

A banjo	B violin
C guitar	D trumpet
- Which group does the musical instrument

belong?

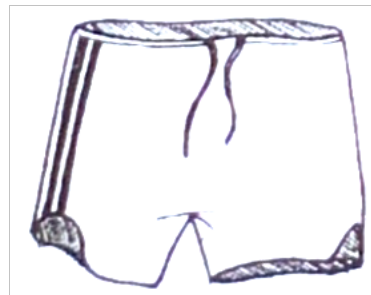
- | |
|-------------------------------|
| A unturned musical instrument |
| B guitar |
| C tuned musical instrument |
| D violin |

- A good poster must have the following qualities except

A red in colour	B white in colour
C small prints	D large
- The following traditional dance is preformed in Nsanje District.

A gule wamkulu	B chioda
C vimbuza	D likhuba

Study the diagram below and use it to answer question below



- Name one requirement that is not needed in making the item in diagram above.

A pins	B strings
C paper pattern	D a pair of scissors
- Identify two dances that are performed in Northern Region.

A ingoma and chisamba
B chisamba and mbotosya
C vimbuza and ingoma
D mbotosya and vimbuza

LIFE SKILLS

- Which of the following is a problem which adolescents faces as they grow up?

A abstinence
B guidance

Name of Candidate: _____

- C sexual harassment
D guidance and counseling
12. Which of the following factors influence people to live together?
A religion B respect
C gossip D honesty
13. Which of the following is an effect of cultural practices on the youth?
A high pass rate B kusasa fumbi
C self control D poor performance
14. Which of the following factors influences the youth to have sexual relationship?
A curiosity B religion
C empathy D patience
15. What type of relationships exists when people are related by tribe?
A kin ship B cultural ties
C ethnics D peers
16. What term is used to describe the behavior of accepting other people's views?
A honest B love
C tolerance D empathy
17. Which of the following is an emotional change that experienced by both boys and girls?
A development of deep voice
B development of facial hair
C development of self confidence
D development of breasts
18. Which of the following is a factor that could enable one to rebuild high self esteem?
A positive views to life
B concentrating on past mistakes
C being aggressive
D negative view of oneself

Read the case study below and answer question 19 and 20

Mayamiko is standard 6 student, he started smoking tobacco and drinking beer with his friends. After sometime he become mad.

19. Which of the following factors could have

influenced Mayamiko to start abusing drugs and substances?

- A assertiveness B anxiety
C peer pressure D self esteem

20. Which of the following could be another negative effect of Mayamiko's behavior?
A early marriage
B becoming intelligent
C getting employed
D school drop out
21. Which of the following is a factor that promotes good interpersonal relationship?
A politeness B disrespect
C dishonest D rudeness
22. Which of the following is not an example of acceptance behavior in the society?
A honesty B injustice
C equality D respect
23. What do we call the principal of fair treatment?
A gender bias B gender equality
C gender equity D gender role
24. Which of the following is an effect of stress and anxiety?
A hard working B studying
C violence D loving
25. Home based care is initiate instead of ____
A police B teachers
C doctors D prisoners
26. Which cultural practice is performed to a deceased wife?
A kulowa kufa B kuchosa fumbi
C fisi D bonus wife
27. The following are the consequences of making decisions without thinking except
A early pregnancies
B passing examinations
C death of loved one
D school drop out
28. Which of the following is a way of avoiding

Name of Candidate: _____

- conflicts?
- A dealing with issues at hand
- B respecting others
- C avoiding risky behavior
- D provoking with people

- C take pain relieving tablets
- D sleep under mosquito net.

29. What is the right to do if one feels like he / she has malaria?
- A go to the hospital for malaria test
 - B take malaria tables

30. Why is the word "Human" used in Human Immuno Deficiency Virus?
- A it infects animals only
 - B it infects people
 - C it infects animals and people
 - D it infects elderly

SECTION B (70 marks)

Answer all the five questions in the space provided.

EXPRESSIVE ARTS (40 marks)

31. (a) i. Define the term "communication"

_____ (1 mark)

- ii. What are the two forms of means of communication?

_____ (2 marks)

- iii. In communication, there is a saying that "Action speaks louder than words" Explain what you understand by these words

_____ (2 marks)

- iv. Apart from embroidering, how else can chair backs be made attractive? Give two.

_____ (2 marks)

Study the illustration of the certain dance below and answer the questions that follow



- (b) i. What name is given to the dance that are shown on the illustration above?

_____ (1 mark)



- ii. In which district is the dance performed?

_____ (1 mark)

32.(a) i. Name the level at which chameleon moves. _____(1 mark)

ii. Explain why it is important to use the right attire in sports and games. _____(2 marks)

Study illustration A and B and answer the questions that follow



iii. Give the names of each type of weaving given above. _____(2 marks)

iv. How the illustration A and B can be made to be strong?

_____ (2 marks)

v. Mention any two products that can produced from weaving.

_____ (2 marks)

33.(a) Identify any two basic skills in each of the following games

i. Football

_____ (2 marks)

ii. Netball

_____ (2 marks)

(b) Define the term "macramé" _____(1 mark)

(c) Give two types of macramé?

_____ (2 marks)

(d) Explain the difference between tragedy and comedy

_____ (2 marks)

(e) Why should actors and actresses appear real?

_____ (2 marks)

Name of Candidate: _____

(f) What are the three forms of carving?

_____ (3 marks)

34. (a) Outline any two criteria for successful team work.

_____ (2 marks)

(b) Why are modeled items kilned? Give two.

_____ (2 marks)

Study the figure below and answer the questions that follow



(c) Name the artistic item

_____ (1 mark)

(d) What material is used to produce the item?

_____ (1 mark)

(e) What are locally available resources?

_____ (1 mark)

LIFE SKILLS (30 marks)

35. (a) i. Define the term "gender stereotype"

_____ (1 mark)

ii. Explain any one characteristic of people with a low self esteem.

_____ (2 marks)

James and Harry were quarrelling because James lost Harry's pen. Chiko was called to solve the problem.

Use this information to answer the questions that follow

(b) What name is given to this method of solving conflict?

_____ (1 mark)

(c) Explain how Chiko arrived at the decision?

_____ (2 marks)

(d) Give other two ways of peaceful conflict resolution

_____ (2 marks)

(e) Mention two factors that promote self esteem.

Name of Candidate: _____

_____(2 marks)

36. (a) List down two characteristics of people with a low self esteem.

_____(2 marks)

(b) Give any two factors that contribute to drug and substances?

_____(2 marks)

(c) What are human rights?

_____(1 marks)

(d) Write any two children's rights.

_____(2 marks)

(e) Mention any two factors that can positively influence the achievement of own goals.

_____(2 marks)

Wongani is standard 8 boy at a certain school. His parents divorced, as such Wongani never concentrated in class and started smoking chamba.

37. (a) What influence Wongani to start smoking chamba?

_____(2 marks)

(b) Name two effects Wongani would face because of this situation

_____(2 marks)

(c) Mention two factors that can help Wongani to manage the situation

_____(2 marks)

(d) Explain the meaning of the terms

i. Orphan

_____(1 mark)

ii. Vulnerable child

_____(1 mark)

(e) Explain the following stages in the VCT process

i. Pre testing counseling

_____(1 mark)

ii. Testing process

_____(1 mark)

38. (a) State any two consequences of making irrational decision

_____(2 marks)

Name of Candidate: _____

(b) What is problem solving?

_____ (1 mark)

(c) Mention two ways of rebuilding self esteem.

_____ (2 marks)

END OF QUESTION PAPER