



CHISAWANI ZONE MOCK EXAMINATION BOARD
2023 PRIMARY SCHOOL LEAVING CERTIFICATE EXAMINATION

ARTS AND LIFE SKILLS

(100 Marks)

Friday, 10th March, 2023

Subject Number: P020

Time allowed: 1:00-

2:30pm

(1½hours)

Name of Candidate: _____
 (Surname First)

Name of School _____

Instructions

1. This paper contains 6 pages. Please check
2. This paper has two sections A and B. Section A consists of **30** multiple choice questions carrying 1 mark each. **Encircle** a letter of your choice representing the right answer to each question. Section **B** has structured questions. Write your answers in the spaces provided. The maximum number of marks for each answer is indicated against the question.
3. Answer **all** questions.
4. In the table provided on this page, tick against the question number you have answered.
5. **IMPORTANT**
 - Please make sure you have written your **name** and **examination number** on the question paper in the spaces provided.
 - Hand in your question paper to the invigilator when time is called to stop writing.

Question Number	Tick Questions 31-37 if answered	Do not write in these columns	
1 - 30			
31			
32			
33			
34			
35			
36			
37			

**SECTION A : MULTIPLE CHOICE
(30 MARKS)**

EXPRESSIVE ARTS (10 MARKS)

1. What name is given to objects which are used direct for teaching and learning in their original form
A. TALULAR C. Realia
B. Objects D. Kinesphere
2. How many players make a team of basketball?
A. 11 C. 8
B. 7 D. 10


The figure below shows one of the musical note. Use it to answer question 3



3. Identify the musical note above?
A. Whole note C. Quarter note
B. Half note D. sixteenth note
4. In Time Signature, what does the top number stands for?
A. Number of beat or counts in a bar
B. Number of bars in a counts
C. Number of people singing
D. None of the above
5. Which way of communicating messages makes issues realistic and more meaningful?
A. Singing C. Using pictures
B. Role play D. Using posters
6. Which leadership style is characterized by Chaos?
A. Democratic C. Absolution
B. Dictatorship D. laissez faire
7. Why songs and dances are vital tools in disseminating cross cutting issues?
A. They sell fast
B. They bring money

- C. They discriminate people
D. They entertain and educate
8. Putting green branches of trees on the road symbolizes:
A. There is funeral
B. There is wedding
C. There are traditional dances
D. There is war

The figure below is a diagram or an artistic item. Use it to answer questions 9 and 10



9. The artistic item is produced by:
A. Moulding C. Weaving
B. Carving D. Drawing
10. Which of the following material is used to make the item?
A. Grass C. shadding
B. Animal skin D. palm leaves

LIFE SKILLS (20MARKS)

11. Which of the following problems are associated with HIV and AIDS?
1. Discrimination 3. Jealousy
2. Adolescence 4. Poverty
A. 1 and 2 C. 3 and 4
B. 1 and 4 D. 2 and 3
12. Which of the following is the factor that enhance effective communication on HIV and AIDS?
A. Choice of language C. Dishonest
B. Illiteracy D. Tolerance
13. Which of the following is the importance of entrepreneurship?
A. Helps to improve one's quality of life
B. Helps one to keep tract of

expenditu

- C. Helps one to get into financial management school
- D. Helps one to have a person plan

Verah a Std 8 girl is complaining that her teacher often touches her breasts when marking class work.

Use this information to answer question 14 and 15)

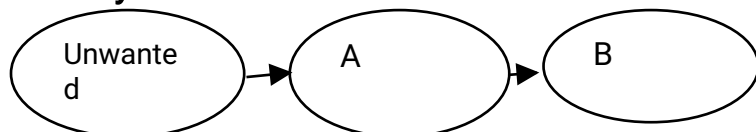
14. What form of challenge is Verah experiencing?
- A. Child abuse
 - B. Sexual abuse
 - C. child trafficking
 - D. sexual harassment

15. Who could help Verah out of this situation
- A. Doctor
 - B. Watchingman
 - C. Peers
 - D. headteacher

16. The following are signs and symptoms of Malaria EXCEPT:
- A. Headache
 - B. Fever
 - C. vomiting
 - D. loss of blood

17. Which of the following is NOT a characteristics of people with high self esteem?
- A. Avoid conflicts
 - B. Self awareness
 - C. Thinking critically
 - D. Fear of making mistakes

Study the futures wheel below:



18. Which of the following can best complete the futures wheel?
- A. Sexual relationships and crime
 - B. Abortion and school drop out
 - C. School drop out and crime
 - D. Puberty and sexual relationships

19. Why are street children and orphans more vulnerable to HIV and AIDS infection?
- A. They are empowered to negotiate for safe sex
 - B. They lack guidance and counseling
 - C. They move from one town to another
 - D. They do a lot of work

20. Which of the following is true about roles and responsibilities in an interpersonal relationship?
- A. Dishonest
 - B. Showing kindness
 - C. Jealously
 - D. low self esteem

Bongani often beats fellow learners and show little respect for teachers. Use this information to answer questions 21 and 22

21. Which of the following could be the cause of Bongani's behaviour
- A. Self confidence
 - B. Self awareness
 - C. Drug and substance abuse
 - D. Positive peer pressure
22. What can be the effect of Bongani's behaviour?
- A. School drop out
 - B. Continue with school
 - C. Getting good grades
 - D. Getting employed

23. Which of the following artistic activities involves verbal form of communication?
- A. Drawing
 - B. Carving
 - C. Singing
 - D. molding

24. Which of the following is the role of the community in the prevention of mother to child HIV transmission?
- A. Conducting HIV testing
 - B. Encouraging both parents to go for HIV testing
 - C. Assisting people that abuse drugs

D. Conducting blood screening

25. The biological expected roles of males and females in a society is called _____

- A. Sexuality
- B. Humanity
- C. Sex
- D. Gender

26. Which of the following is the way of overcoming barriers to peaceful conflict resolution?

- A. Injustice
- B. Tolerance
- C. Promoting discrimination
- D. Promoting gender equality

27. Which of the following is an example of less privileged people?

- A. Prostitutes
- B. Beggars
- C. Women
- D. Cholera

SECTION B (70 MARKS)

EXPRESSIVE ARTS (40 MARKS)

31.a) How does an umpire communicate with players in a game of netball? State one way _____(1marks)

b) State two basic skills in netball

_____ (2marks)

c) What name is given to all the activities which involve transfer of body weight and flexibility of body movement?

_____ (1mark)

32.a) Differentiate between Comedy and Tragedy?

_____ (2marks)

b) List down two factors that can lead to good performance in drama?

_____ (2marks)

c) Why sports attire are important when doing sporting activities. Give two ways

_____ (2marks)

33.a) (i) Which traditional dance is associated with rain making?

_____ (1mark)

(ii) Explain two importance of traditional dances?

_____ (4marks)


b) (i) Define "Career path development"

_____(1mark)

(ii) State two stages in setting up job shading experience to learners

_____(2marks)

Study the figure below and answer questions that follow:



(iii) Name the item

_____(1mark)

(iv) List down two materials used to make the item

_____(2marks)

c) (i) Define communication

_____(1mark)

(ii) Describe two forms of communication

_____(2marks)

(iii) In Malawian culture, what does the shaking of head symbolizes

_____(1mark)

(iv) Write down two advantages of using both forms of communication

_____(2marks)

Figure below shows a diagram. Use it to answer questions that follows:



d. (i) Name the musical instrument?

_____(1 mark)

(ii) How does the instrument produce sound?

_____(1 mark)

(iii) List down two materials used to make instrument above

_____(2 marks)

e. (i) Give two sources of local dyes?

_____(2 marks)

(ii) Describe the process of making black paint from charcoal?

_____(2 marks)

e. Define improvisation

_____(1 mark)

Life skills (30 marks)

34.(i) Define the term "sexuality?"

_____(1 mark)

ii) Describe two factors that influence adolescents sexuality

_____(4 marks)

(iii) List down 3 physiological changes in both boys and girls during adolescence

_____(3 marks)

(iv) Malawi two problems associated with adolescents sexuality

_____(2 marks)

Tumpale and Tilipo are friends. Both are in STD 6. Tumpale smokes chamba and asks Tilipo to start smoking chamba but Tilipo refused. Use this information to answer questions that follows:

35.(i) Identify any one skills that was used by Tilipo to refuse smoking chamba

_____(1 mark)

(ii) state two consequences Tilipo could have faced if he accepted Tumpale demand?

_____(2 marks)

(iii) If you were Tilipo what could you do?

_____(2 marks)

b(i) state any two entrepreneurship skills

_____(2 marks)

(ii) Define entrepreneurship?

_____(1 mark)

(iii) Mention two ways in which planning is important

_____(2 marks)

36.(i) What are human rights?

_____(1 mark)

(ii) List down three rights of children?

EXAMINATION NO: _____

_____ (3 marks)

(iii) Explain how right to education can be violated?

_____ (2 marks)

37. Outline two sources of water?

_____ (2 marks)

b. How can we take care of water to prevent Cholera? Give two ways

_____ (2 marks)

END OF QUESTIONS PAPER

NB: This paper contains 6 pages