

SOCHE ADVENTIST PRIMARY SCHOOL



2023/24 END OF TERM ONE EXAMINATIONS



SOCIAL AND ENVIRONMENTAL SCIENCES

(100 marks)

Time Allowed: 2¹ hours
4

Monday, 11 December, 2023

10:30 am – 12:45 am

Name of Candidate: _____

(Surname First)

INSTRUCTIONS

1. This paper contains 7 printed pages.
Please check.
2. This paper has 2 sections A and B. Answer all questions.
3. Read carefully the instructions of each question before answering.
4. In section A, encircle the letter corresponding to the right answer to each question.
5. In section B, write your answers on spaces provided at the end of each question.
6. In the table provided on this page, tick against the question number you have answered.
7. **Important:**
 - Please make sure you have written your **name** on the question paper in the spaces provided.
 - Hand in your question paper to the invigilator when time is called to stop writing.

Question Number	Tick if answered	Do not write in these columns	
1 – 5			
6 – 10			
11 – 15			
16 – 20			
21 – 25			
26 – 30			
31			
32			
33			
34			
35			
36			
37			

SECTION A

Multiple choice questions (30 marks)

- Which of the following is an example of city assembly?
 - Nsanje
 - Dowa
 - Blantyre
 - Chitipa
- Who is the head of municipal and city assemblies?
 - Mayor
 - Chair person
 - District commissioner
 - Councilor
- Where did the Ngoni come from?
 - Tanzania
 - Mozambique
 - South Africa
 - Zimbabwe
- Which of the following contributions was made by the Ngoni to present Malawi?
 - Tribal wars
 - Harmful cultural practices
 - Stone buildings
 - Traditional dances
- Who founded Mwenemutapa kingdom?
 - Dr. H. Kamuzu Banda
 - Robbert Mugabe
 - Mwari
 - Nyatsimba Mutota
- Which of the following is best way for preventing HIV and AIDS?
 - Condom use
 - Joining clubs
 - Abstinence
 - Avoiding sharing sharp objects
- Which of the following is not an element of weather?

- Soil
- Humidity
- Air pressure
- Temperature

- Which of the following weather instruments is used for measuring rainfall?
 - Rain gauge
 - Thermometer
 - Wind sock
 - Wind vane

Figure 1 below is a diagram showing an instrument for measuring weather. Use it to answer questions 9 and 10.

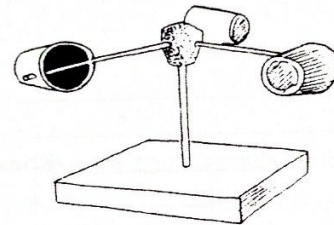


Figure 1: Weather instrument

- Name the weather instrument above.
 - Thermometer
 - Rain gauge
 - Anemometer
 - Wind vane
- What is the use of the instrument?
 - To measure rainfall
 - To measure wind direction
 - To measure temperature
 - To measure wind speed
- Which of the following countries shares boundary with Malawi to the south?
 - Zambia
 - Mozambique
 - Tanzania
 - Zimbabwe

12. Which of the following is a title for Maravi leader?
- A. Kyungu
 - B. Inkosi
 - C. Kalonga
 - D. Themba

Figure 2 below is map of Malawi. Study the diagram and answer questions 13, 14 and 15.

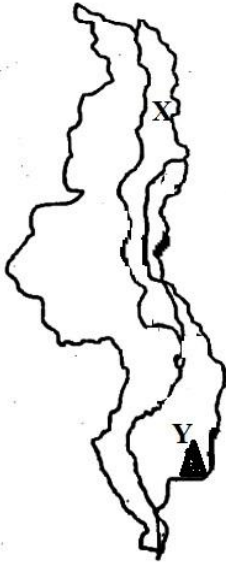


Figure 2: Map of Malawi

13. Name the Lake marked X.
- A. Lake Kazuni
 - B. Lake Chiuta
 - C. Lake Malawi
 - D. Lake Malombe
14. Name the mountain marked Y.
- A. Dedza
 - B. Chiradzulo
 - C. Mulanje
 - D. Kirk range
15. Which of the following minerals is found at mountain marked Y?
- A. Coal
 - B. Bauxite
 - C. Gold
 - D. Petroleum
16. Which of the following planets is far from the sun?
- A. Pluto

- B. Mercury
- C. Uranus
- D. Jupiter

17. Which of the following movements of the earth causes day and night?
- A. Revolution
 - B. Circumnavigation
 - C. Rotation
 - D. Erosion

18. Which of the following African countries were not colonized during the partition of Africa?
- A. Ghana and Uganda
 - B. Malawi and Zambia
 - C. Angola and Kenya
 - D. Ethiopia and Liberia

Figure 3 below is map showing West Africa slave trade routes. Study the map answer questions 19 and 20.

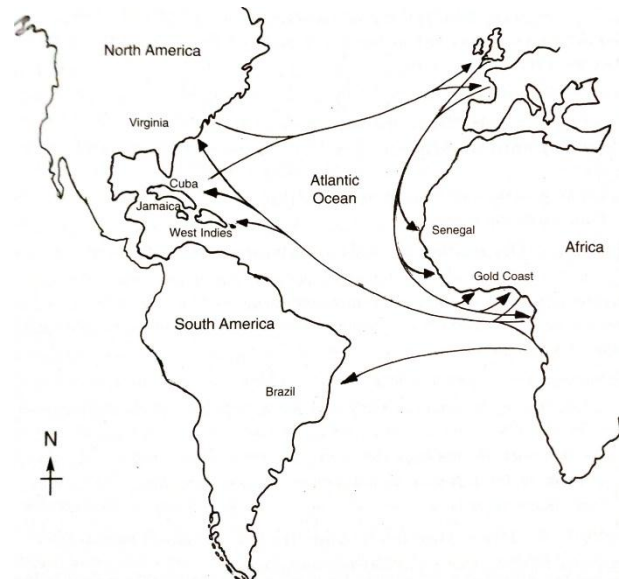


Figure 3: Map showing West Africa slave trade routes

19. What term was used to describe the trade of slaves shown in the figure above?
- A. Great gold trade
 - B. Great triangle trade
 - C. Great slave trade
 - D. Great British trade
20. Give a reason why the above slave trade was called by the name above.
- A. Because the trade involved slaves
 - B. Because the trade involved gold

- C. Because the trade was masterminded by the British
 - D. Because the routes taken formed a triangle
21. Identify the notable abolitionists from the following:
- A. John Wesley and Thomas Clarkson
 - B. David Livingstone and John Chilembwe
 - C. Mungo Park and Henry Stanley
 - D. William Wilberforce and Nelson Mandela
22. When did Britain pass a law forbidding slave trade throughout the British Empire?
- A. 1807
 - B. 1833
 - C. 1848
 - D. 1868
23. Who declared the freedom of all slaves in United States of America in 1863?
- A. Granville Sharpe
 - B. Michael Jackson
 - C. Abraham Lincoln
 - D. Jimmy Carter
24. Which of the following explanations describes the term “stereotype?”
- A. Biological difference determining males and females
 - B. Beliefs people have in societies towards the roles of males and females
 - C. Aspect of being male or female as defined by particular culture
 - D. Giving equal opportunities to both males and females
25. Which of following African countries doesn't recognize chieftainship?
- A. Tanzania
 - B. Malawi

- C. Uganda
 - D. Zimbabwe
26. Which of the following tribes practices patrilineal system of marriage?
- A. Chewa
 - B. Lomwe
 - C. Yao
 - D. Ndebele
27. The following are forces that influence cultural change except _____
- A. Religion
 - B. War
 - C. Travel
 - D. Intermarriages
28. Which of the following gods of Greek civilization was for wisdom and civilization?
- A. Zeus
 - B. Athena
 - C. Aphrodite
 - D. Apollo
29. Which of the following was not a reason for the decline of the Greek civilization?
- A. Once united city states eventually began to work individually
 - B. The war between Athens and Sparta weakened the civilization
 - C. Mass production of sculptures led to poor quality products
 - D. Vastness of the Empire made it difficult to defend.
30. Which of the following factors led to the growth of Roman civilization?
- A. Religion
 - B. Revenue from tax
 - C. Farming
 - D. Wars

SECTION B

Structured questions (70 marks)

31. a) Define the term *trade*.

b) What is hire purchase?

c) Identify two main types of trade.

- i. _____
 - ii. _____
- d) Write down any two importance of trade.
- i. _____
 - ii. _____
- e) State any two disadvantages of hire purchase to the buyer
- i. _____
 - ii. _____

Figure 4 is diagram showing fire accident. Study the figure and answer question 32 a and b




Figure 4: Fire accident

32. a) Explain possible damage that the grocery owner is likely to face as a result of the accident.

b) Suggest a type of policy that would protect the owner against such a risk.

c) State any two importance of insurance.

- i. _____
- ii. _____

d) What is a budget?

e) Identify any two factors to be considered when budgeting.

- i. _____
- ii. _____

33. a) List down any two roles of Malawi Revenue Authority (MRA).

- i. _____

ii. _____

b) Mention any two ways through which government raises revenue.

i. _____

ii. _____

c) Identify any two types of tax

i. _____

ii. _____

d) Outline any two uses of taxes collected by the Malawi Revenue Authority.

i. _____

ii. _____

e) Write down any two solutions to the challenges faced by the Malawi Revenue Authority.

i. _____

ii. _____

34. a) Identify any two common features of all types of constitutions.

i. _____

ii. _____

b) State any two functions of the constitution.

i. _____

ii. _____

c) List down the three branches of the Central Government.

i. _____

ii. _____

iii. _____

d) State two functions of the Judiciary.

i. _____

ii. _____

e) Mention any two national symbols of Malawi.

i. _____

ii. _____

35. a) State any two events that contributed to attainment of self-government in Nyasaland.

i. _____

ii. _____

b) When was Nyasaland African Congress formed?

c) Who founded the Malawi Congress Party?

d) When did Nyasaland become independent state called Malawi?

e) Write down any two disadvantages of multiparty system of government.

- i. _____

- ii. _____

36. a) List down two aims of Independent African Churches.

- i. _____

- ii. _____

b) Mention any two Independent African Churches in Nyasaland.

- i. _____
- ii. _____

c) Name the Independent African Church which was also known as “*Mpingo wa Afipa Wa mu Africa*”.

d) When did John Chilembwe come back from America?

e) State two reasons why Church of Scotland established Blantyre mission in Kapeni’s area in 1876.

- i. _____

- ii. _____

37. a) Mention any two tourism centers of Southern Africa.

- i. _____
- ii. _____

b) State any two importance of tourism.

- i. _____

- ii. _____

c) Give any two physical factors that influence development of tourism in Southern Africa.

- i. _____
- ii. _____

d) List down any two factors that hinder development of tourism in Southern Africa.

- i. _____
- ii. _____

e) Define the term “natural disasters”.

End of question paper