

THE CHIMUNGU ZONAL EXAMINATION BOARD 2025

PRIMARY SCHOOL LEAVING CERTIFICATE MOCK EXAMINATION EXPRESSIVE ARTS AND LIFE SKILLS

(100 marks)



Subject Number: P017

Time Allowed: 1½ hours

1:00 – 02:30 Pm

Date: 21/02/2025

Name of Candidate: _____
(Surname First)

Name of School: _____

Instructions

1. This paper contains 7 printed pages.
Please check.
2. This paper has **two** sections **A** and **B**. Section **A** consists of 30 multiple choice questions carrying 1 mark each. **Encircle** a letter of your choice representing the right answer to each question. Section **B** has 7 structured questions. Write your answer to this section on the question paper in the spaces provided. The maximum number of marks for each answer is indicated against the question.
3. Answer **all** questions.
4. In the table provided on this page, **tick** against the question number you have answered.
5. **IMPORTANT**
 - Please make sure you have written your **name** and **examination number** on the question paper in the spaces provided.
 - Hand in your question paper to the invigilator when time is called to stop writing.

Question Number	Tick questions 31 – 38 if answered	Do not write in these columns	
1 – 30			
31			
32			
33			
34			
35			
36			
37			
38			
39			

Turn over
@ CHIZEBO 2025

SECTION A: ARTS (10marks)

ARTS (10 marks)

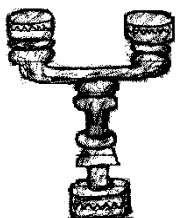
1. Which of the following traditional dances are associated with healing?
 - A. Likhuba and Nsindo
 - B. Utse and Likwata
 - C. Malombo and Vimbuza
 - D. Tchopa and Likhuba
2. Which of the following are examples of mordants?
 - A. Salt and acetic acid
 - B. Sugar and sand
 - C. Chrome and pepper
 - D. Salt and sugar
3. Give an example of a collaborative sport

A. Taibo	C. Chess
B. Mganda	D. Football
4. In which situation does a frog move at high level?
 - A. When entering a hole
 - B. When running away from danger
 - C. When swimming
 - D. When looking for food
5. Which of the following can be produced through plaiting?

A. Door mat	C. Candle holder
B. Car	D. Clay pot
6. Which of the following is a tuned musical instrument?

A. Whistle	C. Guitar
B. Shaker	D. Drum

Figure 1 is a diagram showing an artwork. Use it to answer questions 7 and 8.



7. What is the name of the artwork?

A. Candle holder	C. Pot holder
B. Macramé	D. Salt shaker
8. Which of the following materials can be used when making the artwork?

A. Hoe and rake	C. Rake and adze
B. Saw and adze	D. Hoe and saw
9. Why is sports attire used when doing sporting activities?
 - A. To suit the player
 - B. To develop skills in the player
 - C. To allow freedom of body movements
 - D. To prevent sweating
10. What is the disadvantage of using non – verbal communication?
 - A. It attracts the listener
 - B. It is difficult to understand
 - C. It is easy to understand
 - D. Ideas are effectively communicated

LIFE SKILLS (20 Marks)

11. Which of the following situations requires planning?

A. Peer pressure	C. Stress and anxiety
B. Choice of career	D. Honest
12. Which of the following is a characteristic of people with low self – esteem

A. Self-starter	C. Innovative
B. Ambitious	D. Shy

Many is a standard 8 girl. She started involving herself in sexual relationships use this information to answer question 13 and 14.

13. Which of the following could be the negative effect of Mary’s behaviour?
 - A. Becoming popular
 - B. Becoming rich
 - C. Unwanted pregnancy
 - D. Passing exams

14. Which of the following would best help Mary to correct her behaviour?
 A. Guidance and counselling
 B. Conflict resolution
 C. Entrepreneurship
 D. Peer pressure resistance
15. Which of the following factors influence the youth to have sexual relationships?
 A. Religion C Parents
 B. Curiosity D Empathy
16. The term used to describe the total expression whether one is male or female is called
 A. Stress and anxiety C Sexuality
 B. Assertiveness D Creative thinking
17. Which of the following is a common sexually transmitted infection?
 A. Malaria C Covid – 19
 B. Diarrhoea D Syphillis
18. Which of the following groups of less privileged does a deceased woman belong to?
 A. Street children C Widow
 B. Orphan D Aged
19. Which of the following is a source of morals and values?
 A. School C Forests
 B. Roads D Play ground
20. Which of the following is a barrier to effective communication on HIV and AIDs?
 A. Empathy C Illiteracy
 B. Respect D Patience
21. Which of the following is a biological role of a man?
 A. Sourcing basic needs
 B. Child bearing
 C. Rearing animals
 D. Impregnating a woman
22. Which of the following is one of the problems associated with home – based care
 A. Sensitisation C Lack of resources
 B. School dropout D Respecting others

23. What type of interpersonal relationship exists among people of the same tribe
 A. Peer C Kinship
 B. Cultural D Ethnic
24. Why is entrepreneurship important?
 A. It improves quality of life
 B. It helps one to be famous
 C. It helps one to have personal plan
 D. Helps one to enjoy with life

When Walipo reached puberty, her father saw no need for the daughter to be initiated while her mother wanted her to be initiated. Use this information to answer questions 25 and 26.

25. What is the source of conflict between the parents?
 A. Social status C Cultural differences
 B. Age differences D Education background
26. Which of the following ways could Walipo's parents use to settle their differences?
 A. Self-awareness C Negotiation
 B. Copying with stress D Entrepreneurship
27. What is the role of the community in prevention of mother – to – child transmission?
 A. Encouraging girls to get married earlier
 B. Encouraging families to have more children
 C. Encouraging both parents to go for HTC
 D. Encouraging safe mother hood
28. Which of the following is a psychological change that take place in both boys and girls during adolescence?
 A. Hair grow around pubic area
 B. Skin become oily
 C. Growing taller
 D. Developing sexual feelings
29. What is the best way of preventing HIV and AIDs?
 A. Abstinence C Condom use
 B. Being faithful D Cultural practices

30. Which of the following activities would expose the youth to HIV and AIDs?

A. Playing with boys

B. Doing physical exercised

C. Engaging in unprotected sex

D. Learning in the same class

SECTION B (70Marks)

EXPRESSIVE ARTS (40Marks)

31.a) Define the term improvisation


_____ (2marks)

b) Give any two importance of improvisation

i. _____ (1mark)

ii _____ (1mark)

Figure 2 is a diagram of a musical instrument. Use it to answer the questions that follows



c)i) Identify the musical instrument _____ (1mark)

ii) How does the musical instrument produce sound? _____ (1mark)

iii) In which type of musical instruments does the figure belong? _____ (1mark)

32.a) Mention any two garments which convey different cultural messages

i. _____

ii. _____ (2marks)

b) Name the colour that the widow wears during mourning period _____ (1mark)

c) State the meaning of bringing a black chicken to a chief among the Chewa _____ (1mark)

d) Describe floor pathways in components of general space _____ (2marks)

Figure 3 is an illustration showing a traditional dance. Study it and answer the questions that follow



33.a) Name the dance above

_____ (1mark)

b) Mention any one district where the dance is performed

_____ (1mark)

c) Give any two importance of traditional dances

i. _____

ii _____ (2marks)

d)i) What does the top number in the time signature $\frac{4}{4}$ stand for in music

_____ (1mark)

ii) Name any one item in artwork that could be made from each of the following materials

i. Clay _____ (1mark)

ii. Palm leaves _____ (1mark)

34.a) Mention any two artwork activities that may cause damage to the environment

i. _____

ii. _____ (2marks)

b) Give any two skills that players may use during sporting activities

i. _____

ii. _____ (2marks)

c) State any two importance of sports and games

i. _____

ii. _____ (2marks)

d) Name the height level at which the body moves when

i. Crossing a road _____ (1mark)

ii Coming out of a funeral house _____ (1mark)

iii. Explain a situation whereby body movement can be done at high level

_____ (2marks)

35.a) Mention any two career opportunities that exist in the communities

i. _____

ii. _____ (2marks)

b) Name any two awareness activities that could be done before choosing a career.

i. _____

ii. _____ (2marks)

c)i) Give any two art and craft activities that are gender stereotyped

i. _____

ii _____ (2marks)

ii) State any two characteristics of a good dye

i. _____

ii. _____ (2marks)

d) Mention any two examples of contemporary dancing styles

i. _____ ii _____ (2marks)

LIFE SKILLS (30Marks)

36.a) State any two factors that influence the youth to have sexual relationship

i. _____

ii. _____ (2marks)

b) Explain any two consequences of sexual relationship

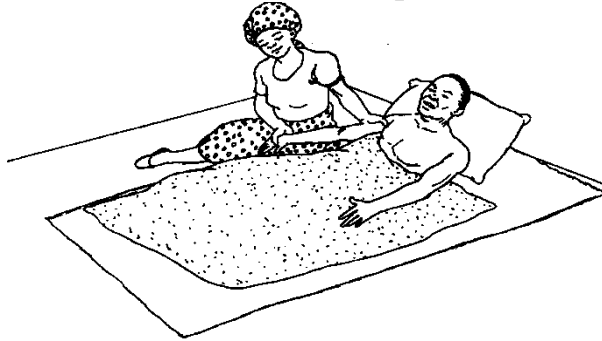
i. _____

ii _____ (2marks)

c) Mention any one life skills that youths would use to cope with the challenges of growing up

_____ (1mark)

Study the illustration below and answer the questions that follow



37.i) Identify an activity shown above _____ (1mark)

ii) Explain any two importance of the activity shown above

i. _____

ii. _____ (2marks)

iii) Mention any two factors that can negatively affect the achievement of one's goal

i. _____

ii. _____ (2marks)

38.a) *Shamila and Andiwa were in standard 5. One day, they arrived at school late. Their class teacher punished them by beating them for coming late. Later, the teacher reported this to the headteacher who finally dismissed the two from school. Use this information to answer questions that follow*

i) Mention any one right that both teacher and headteacher violated

_____ (1mark)

ii) Name any one skill which the headteacher would have used to solve the matter

_____ (1mark)

b) Give any two factors that enhance effective communication on HIV and AIDs messages

i. _____

ii. _____ (2marks)

c) Mention any two sources of information on sex and sexuality

i. _____

ii _____ (2marks)

d) Explain any two reasons why more females are affected and infected by HIV and AIDs than males

i. _____

ii _____ (2marks)

39.a) State any two ways in which resisting negative peer pressure is important

i. _____

ii. _____ (2marks)

b) State any one importance of good sanitation

_____ (1mark)

c) Mention any two cultural practices that negatively affect the health of a person

i. _____

ii _____ (2marks)

d) Mention any two types of interpersonal relationship

i. _____

ii _____ (2marks)

e) Explain how ABC concept works in HIV prevention

_____ (3marks)

f) How can one manage stress and anxiety (Give two points)

_____ (2marks)

THE END OF QUESTION PAPER