

Name of Student: _____



MTUNTHAMA ALL SAINTS PRIMARY SCHOOL

2025 PRIMARY SCHOOL LEAVING CERTIFICATE MOCK TWO EXAMS

ARTS AND LIFE SKILLS

(100 marks)

Time Allowed: 1 hr 30 mns

Instructions

1. This paper contains 10 pages. Please check.
2. This paper has two sections A and B. Section A consists of 40 multiple choice questions carrying 1 mark each. Section B has 10 structured questions. Write answers to this section in the space provided.
3. Answer all questions.
4. In the table provided on this page, tick against question number you have answered.
5. **IMPORTANT**
 - ✓ Please make sure you have written your name, school name and examination number on the spaces provided
 - ✓ Hand in your question paper to the invigilator when time is called to stop writing.

Question number	Tick Qs 31-40 if answered	Do not write in these columns	
1-30			
31			
32			
33			
34			
35			
36			
37			
38			
39			

Turn over

SECTION A (70 MARKS)

EXPRESSIVE ARTS (10 MARKS)

1. Which of the following artwork can be communicated purely none verbally?
 - A. songs
 - B. role play
 - C. marshal arts
 - D. posters
2. Which of the following shows the cultural values among the youths?
 - A. making gestures
 - B. kneeling down before elders
 - C. singing before elders
 - D. nodding head before elders


Study the figure1 below and answer the questions 4 and 5.



3. Name the musical instrument.
 - A. Flute
 - B. Shaker
 - C. piano
 - D. guitar
4. How is the musical instrument played?
 - A. Shacking
 - B. Beating
 - C. plucking
 - D. blowing
5. Why are mirroring activities important?
 - A. They improve health
 - B. They imitate the leader
 - C. Learners gain skills
 - D. They improve the shape of the body

6. Which of the following is not one of the factors to consider when composing songs?
 - A. age of target group
 - B. cultural background
 - C. colour of surrounding
 - D. religion of target group

Study the diagram below and answer the question that follows



7. Which of the following mirroring games is being played?
 - A. Volley ball
 - B. Basket ball
 - C. table tennis
 - D. netball
8. Which of the following is the importance of using attire in sports and games?
 - A. players play better in uniform.
 - B. they give out identity to the team
 - C. they can be bought or made locally
 - D. a team wins when it is in uniform
9. Which of the following is the importance of displaying teaching and learning resources in a class room?

- A. For close studying
- B. To beautify the class room
- C. To keep the resources safe
- D. To accommodate lazy learners

10. The following are ways of decorating artwork except.

- A. Tattooing
- B. Drying
- C. Polishing
- D. Coiling

LIFE SKILLS (20 MARKS)

11. Which of the following best define the term gender equity?

- A. the principle of fair treatment
- B. giving more power to someone
- C. treatment that favours one sex
- D. treating both male and female equally

12. How does sexually negativity affect adolescent behaviour?

- A. Development of special interest in the opposite sex
- B. Development of more self confidence
- C. Development of a heavier body
- D. Development of deeper voice

Mary is a standard 6 girl. She always feels shy when responding to questions in class every time when the teacher asked her. Use the information to answer questions 13 and 14

13. Which of the following skills is Mary showing?

- A. High self esteem
- B. Assertiveness
- C. Low self esteem

D. Effective communication

14. What can be the best way of assisting Mary to overcome this challenge

- A. Guidance and counseling
- B. Empathy
- C. Tolerance
- D. Critical thinking

15. Which of the following is a way of overcoming barriers to effective communication on HIV/AIDS issues?

- A. Lack knowledge
- B. Respect for other people's culture
- C. Illiteracy level
- D. Audience to be communicated

16. Which is the best way of disposing human waste at school?

- A. Rubish pit
- B. Dust bin
- C. Burning
- D. Pit latrine

17. Which of the following is not a consequence of making decisions without proper thinking?

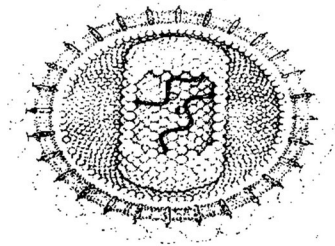
- A. Early pregnancies
- B. Passing examinations
- C. Committing suicide
- D. School drop out

18. Which of the following factors influences the youth to have sexual relationships?

- A. Curiosity
- B. Religion

- C. Empathy
- D. Patience

Study the diagram below and answer the questions that follow



19. Identify the structure above.
- A. white blood cell
 - B. muscles cell
 - C. heart cell
 - D. HIV cell
20. What problem is caused by the structure?
- A. destroy immune system
 - B. sucks blood
 - C. causes malaria
 - D. destroy red blood cells

A standard 5 girl at a certain primary school lost both parents as she was about to write end of term examination. Use this information to answer questions 21 and 22

21. Which of the following would be negative effects of the girl's situation?
- A. high self esteem
 - B. stress and anxiety
 - C. passing her examination
 - D. selection to secondary school
22. Which of the following would be the best way for the girl to manage this situation?
- A. providing medical help
 - B. telling her to stop school

- C. telling her to get married
- D. seeking guidance and counseling

Tiyanjane is a standard eight boy. He is in school AIDS TOTO drama club which is going away to perform in an inter-school drama competition. He has never performed before a big audience and is therefore afraid of this. His peers advise him to smoke Indian hemp or drink beer in order to be brave.

Use this information to answer questions 23 and 24

23. Why was Tiyanjane afraid to perform in an inter-school drama competition?
- A. because of big audience
 - B. because of his friends
 - C. because it was the first time to smoke
 - D. because he wanted to drink beer first
24. What is the consequence of drinking beer and smoking Indian hemp?
- A. one becomes intelligent
 - B. poor judgment
 - C. one may have many good friends
 - D. one may marry a beautiful woman
25. The following are causes of sexual abuse except
- i. Forced marriage
 - ii. Negative comment
 - iii. Break up families
 - iv. Peer pressure
- A. i. and ii
 - B. ii and iii

- C. i. and iv
- D. iii and iv

- B. physically and mentally challenged
- C. employed people
- D. shop keeper

26. Which of the following is a skill that involves expressing one's thought in a clear manner?

- A. self esteem
- B. assertiveness
- C. morals
- D. conflict

29. Which of the following is a specific right of people living with HIV/AIDS?

- A. right to play
- B. right to education
- C. right to liberty
- D. right to be treated with respect and dignity

27. Which of the following can lead to conflict among people?

- A. peace
- B. love
- C. negotiation
- D. property grabbing

30. Which of the following factors could enable one to rebuild high self esteem

- A. positive view to life
- B. concentrating on passing mistake
- C. being aggressive
- D. negative view of oneself

28. Which of the following is an example of less privilege people?

- A. vendors

SECTION B Expressive Arts (40 marks)

31.(a). i. Give any one example of risk in ball games

_____ (1 mark)

(ii). State any one way of preserving culture

_____ (1 mark)

(iii). Define the term nature trail?

_____ (1 mark)

(b). Mention any two traditional dances which involve coordination of body parts.

_____ (2Marks)

(c). Name any two importance of writing a play from African story

_____ (2 marks)

(d). Explain any one importance of decorating artwork

_____ (2 marks)

Study the figure below and answer questions that follows



32. (a) i. Identify the item above

_____ (1 mark)

ii. Give any one use of the item

_____ (1 mark)

iii. State any two ways of decorating the item

_____ (2 marks)

(b)) Write down any two artistic activities that requires less personal space

i. _____ (1 mark)

ii. _____ (1 mark)

(c) Give any two artistic activities that can cause land degradation

_____ (2 marks)

(d) Give any two ways how a player can kick the ball

_____ (2 marks)

33.(a) Name any one aspect that is similar in traditional dances

_____ (1 mark)


(ii). Name any two materials used to make a shaker

_____ (2 marks)

(b) Give any one importance of musical instruments

(2 marks)

(c) What is the meaning of the following symbols?

i.  _____ (1 mark)

ii.  _____ (1 mark)

(d) Give any one use of the following tools in carving

i. vice _____ (1 mark)

ii sand paper _____ (1 mark)

(f) Give any one quality of a good leader

(1 mark)

34. (a) State any two mirroring games

(2 marks)

(b) Define the term multicultural dances.

(2 marks)

(c) Study figure below and answer the questions that follow



i) Which of the two diagrams represent modern means of communication? _____ (1 mark)

ii) State any one occasion when the modern means mentioned in diagram above could be used. _____ (1 mark)

(d). Give any one example of mordant when dyeing fabric _____ (1 mark)

(e) Explain a situation where by body movement can be done at high level.

_____ (2 marks)

(f). Give any two stages in garment construction

_____ (2 marks)

LIFE SKILLS (30 marks)

35.(a). State any two negative effects of immoral behaviour

_____ (2 marks)

(b). Mention any two challenges that the youth encounter in everyday life.

_____ (2 marks)

(c).(i). State any one way of managing problems associated with home based care.

_____ (1 mark)

(ii). Explain any one importance of creative thinking in entrepreneurship

_____ (2 marks)

(d). i. Name any two qualities of a good counsellor

_____ (2 marks)

(ii). Give any one way in which rewards can promote high self-esteem.

_____ (1 mark)

36.(a). Distinguish between signs and symptoms

_____ (2 marks)

Mr Moyenda’s brother died a month ago. Due to culture, Mr Moyenda has sexual intercourse with his late brother’s wife. Use this information to answer questions that follow

i. Name the cultural practice Mr Moyenda performs.

_____ (1 mark)

ii. What could be the consequence to Mr. Moyenda’s behaviour?

_____ (1 mark)

(b). Figure 7 shows a girl and a boy. Use it to answer questions that follow



Name of Student: _____

2025

Page 9 of 9

(b) i) what type of human Right does a Girl want to achieve ?

_____ (1 mark)

ii) give any one consequence that would happen if the girl had low self-esteem?

_____ (1 mark)

(c) Mention two importance of the girl's decision.

i. _____ (1 mark)

ii. _____ (1 mark)

(d) Give two challenges that the youth face in their everyday life.

i. _____ (1 mark)

ii. _____ (1 mark)

37.a. i. Name any two ways of assisting drug and substance abusers to stop their habit

_____ (1 marks)

_____ (1 marks)

b) Give two misconceptions that the youth may have about the use and abuse of drugs and substances.

_____ (2 marks)

(c). Explain the importance of applying paraffin on stagnant water as a way of preventing Malaria.

_____ (2 marks)

38 .a) Mention two types of interpersonal relationships.

i. _____ (1 mark)

ii _____ (1 marks)

b). Give any two factors that destroy relationships.

i. _____ (1 marks)

ii _____ (1marks)

c). Give any two examples of sex roles

_____ (2 marks)

END OF QUESTION PAPER